

COUNTING

100 CHART

A 100 chart helps you see all of the numbers from 1 to 100 in order. There are a lot of patterns in the 100 chart that will help you do much more than just count!

61. Fill in the missing numbers in the hundreds chart below.

1	2	3	4	5	6	7		9	10
11	12	13	14	15	16	17	18	19	
21		23	24	25	26	27	28	29	30
31	32	33	34	35		37	38	39	40
41	42	43		45	46	47	48	49	50
	52	53	54	55	56	57	58	59	60
61	62	63	64	65	66	67	68		70
71	72	73	74	75	76		78	79	80
81	82		84	85	86	87	88	89	90
91	92	93	94		96	97	98	99	100

PRACTICE | Fill in the missing numbers from the rows of the 100 chart below. You can use the chart on the left for help.

62.

21		23	24	25		27		29	30
----	--	----	----	----	--	----	--	----	----

63.

41	42			45		47	48		50
----	----	--	--	----	--	----	----	--	----

64.

51		53	54				58	59	60
----	--	----	----	--	--	--	----	----	----

65.

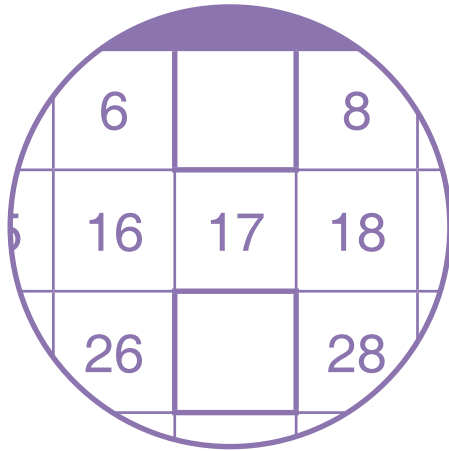
81			84	85	86		88		
----	--	--	----	----	----	--	----	--	--

66.

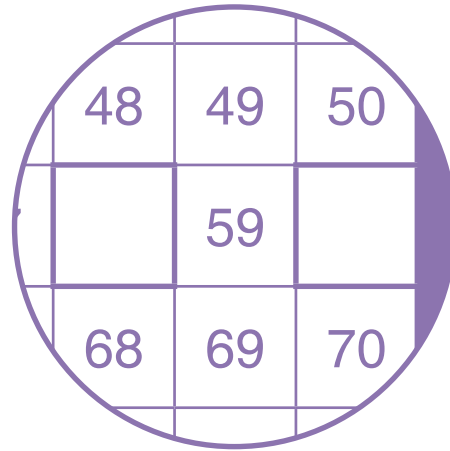
		93	94		96	97		99	
--	--	----	----	--	----	----	--	----	--

PRACTICE | Which numbers are missing from these parts of the 100 chart? You can use the chart on the left for help.

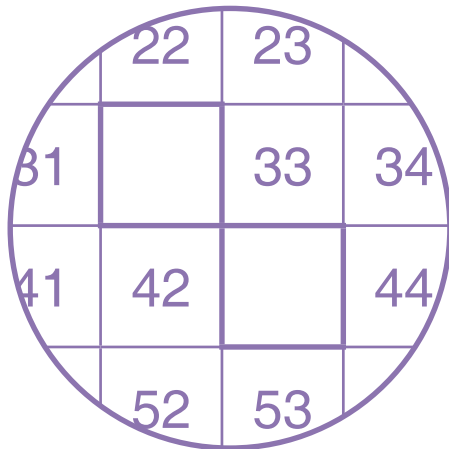
72.



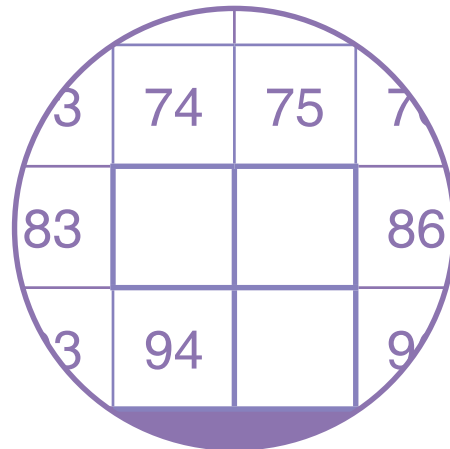
73.



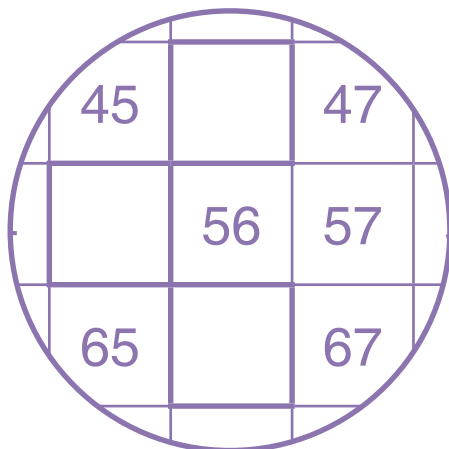
74.



75.



76.



77.

