

ADDITION & SUBTRACTION

TENS AND ONES

Addition

When we add the tens and ones separately, sometimes we end up with more than ten ones.

For example, to add $45 + 38$, we add $40 + 30$ and $5 + 8$.

$40 + 30$ is 70, and $5 + 8$ is 13. So, $45 + 38$ is $70 + 13 = 83$.

$$45 + 38 = 83$$

$$\begin{array}{r}
 40 + 30 + 5 + 8 \\
 \swarrow \quad \searrow \quad \swarrow \quad \searrow \\
 70 \quad + \quad 13 \\
 \swarrow \quad \searrow \\
 83
 \end{array}$$

PRACTICE | Fill in the empty blanks to find each sum.

$$231. \quad 29 + 34 = \boxed{50} + \boxed{13} = \boxed{}$$

$$232. \quad 28 + 44 = \boxed{60} + \boxed{} = \boxed{}$$

$$233. \quad 35 + 25 = \boxed{} + \boxed{10} = \boxed{}$$

$$234. \quad 18 + 33 = \boxed{} + \boxed{} = \boxed{}$$

ADDITION & SUBTRACTION
TENS AND ONES

PRACTICE | Fill in the empty blanks to find each sum.

$$235. \quad 27 + 55 = \square + \square = \square$$

$$236. \quad 36 + 17 = \square + \square = \square$$

$$237. \quad 56 + 44 = \square + \square = \square$$

$$238. \quad 49 + 36 = \square + \square = \square$$

$$239. \quad 16 + 75 = \square + \square = \square$$

$$240. \quad 51 + 19 = \square + \square = \square$$

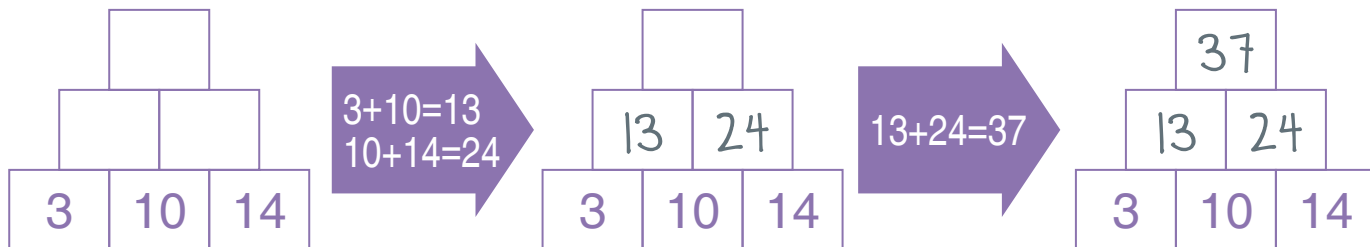
$$241. \quad 45 + 38 = \square + \square = \square$$

ADDITION & SUBTRACTION SUM PYRAMIDS

Add until you reach the top.

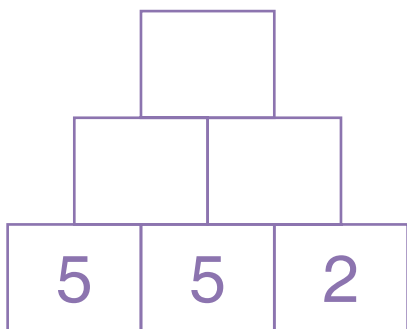
Sum Pyramids

In a Sum Pyramid, the number in each block is the sum of the two numbers below it.

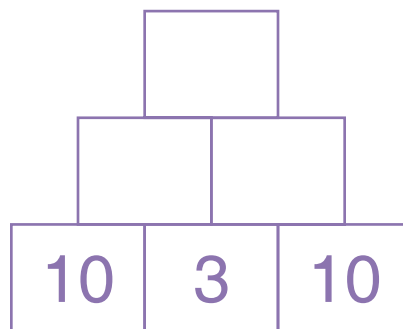


PRACTICE | Fill in the empty blocks to complete each Sum Pyramid.

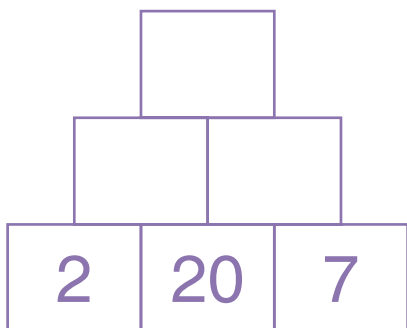
242.



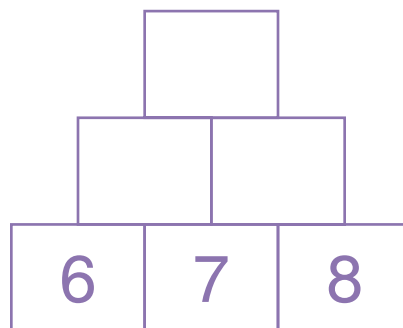
243.



244.



245.

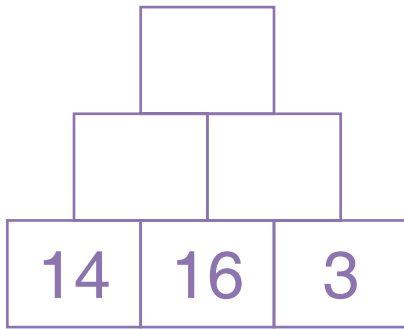


ADDITION & SUBTRACTION

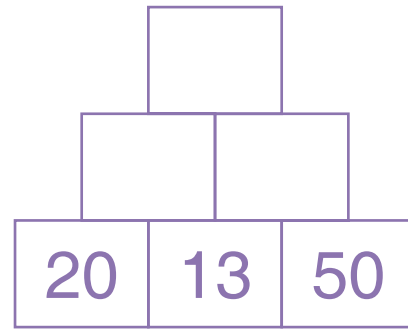
SUM PYRAMIDS

PRACTICE | Fill in the empty blocks to complete each Sum Pyramid.

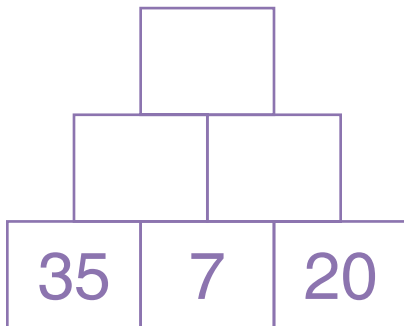
246.



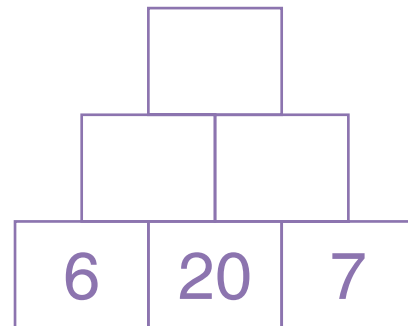
247.



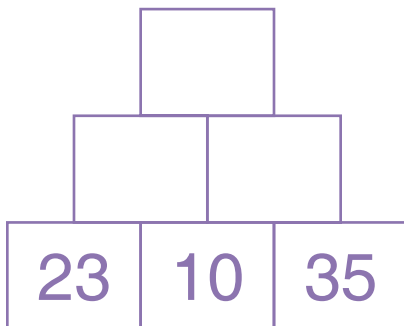
248.



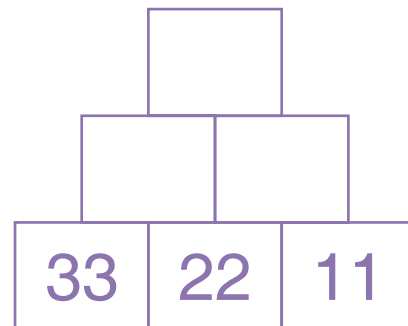
249.



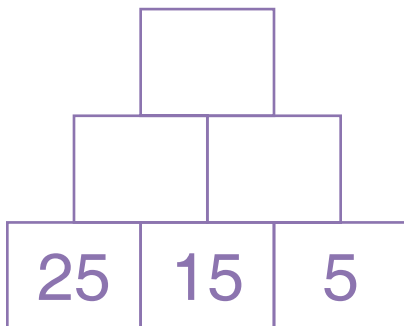
250.



251.



252.



253.

