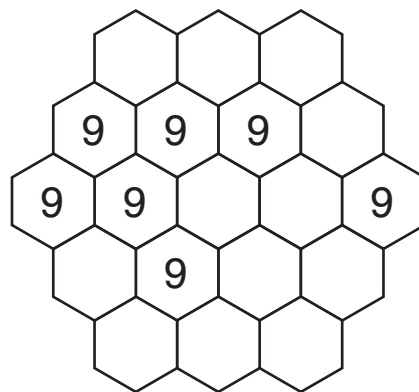
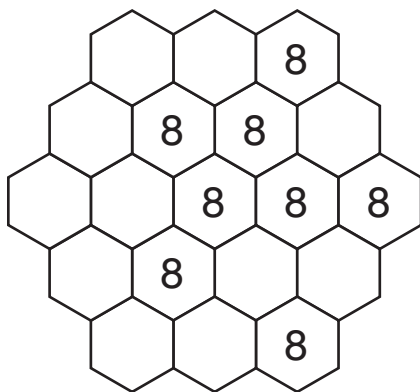
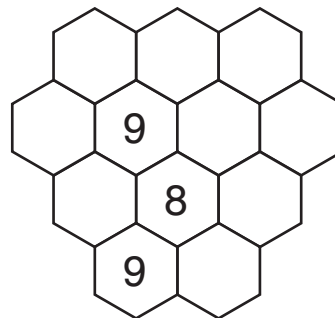
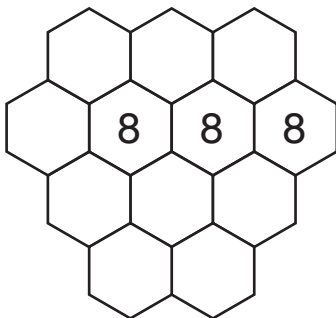
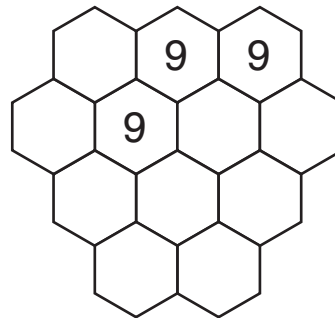
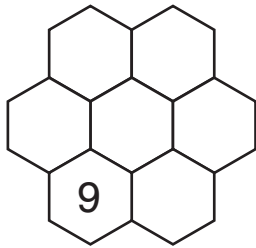


# 8's and 9's Puzzles

Practice 2C: Chapter 9, pages 86-87

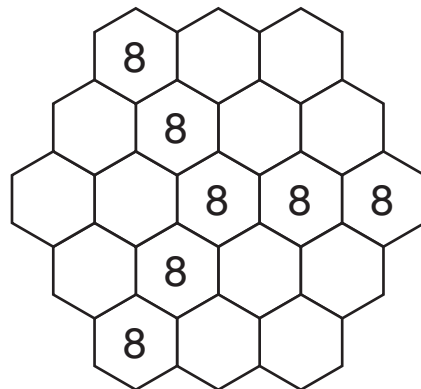
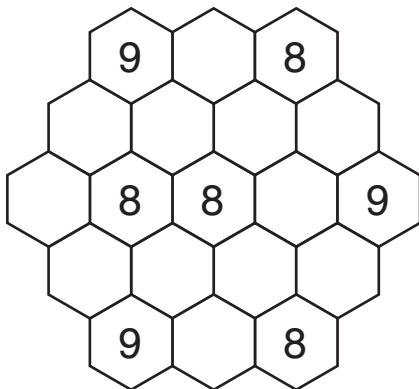
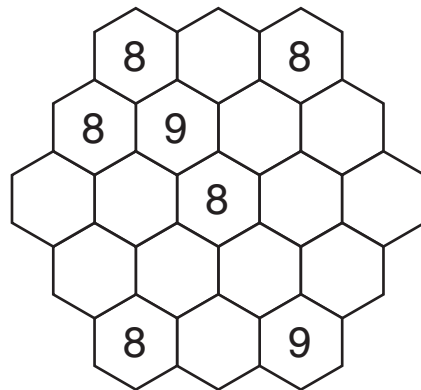
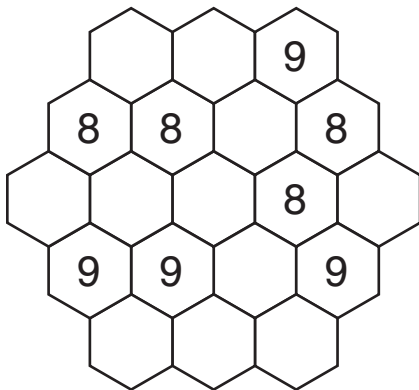
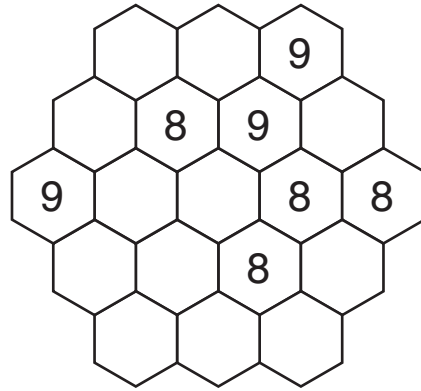
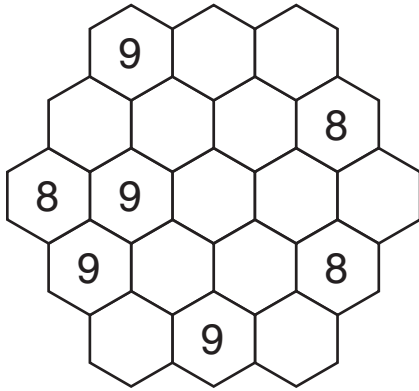
In an **8's and 9's** puzzle, fill the hexagons with 8's and 9's so that the sum of the numbers in every row is odd. Rows in this puzzle can be horizontal ( $\leftrightarrow$ ) or diagonal ( $\nearrow$  or  $\searrow$ ).



# 8's and 9's Puzzles

Practice 2C: Chapter 9, pages 86-87

In an **8's and 9's** puzzle, fill the hexagons with 8's and 9's so that the sum of the numbers in every row is odd. Rows in this puzzle can be horizontal ( $\leftrightarrow$ ) or diagonal ( $\nearrow$  or  $\searrow$ ).



# 8's and 9's Puzzles Key

Practice 2C: Chapter 9, pages 86-87

